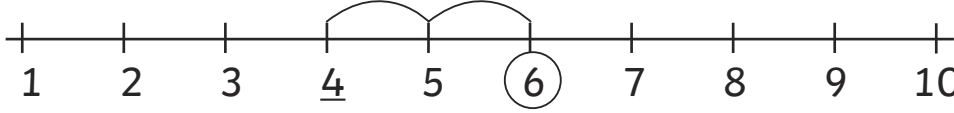
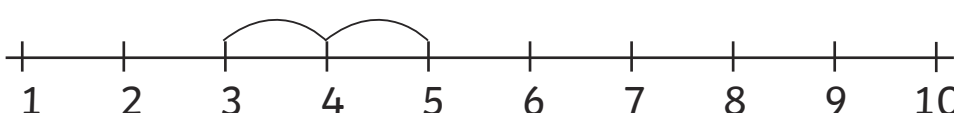
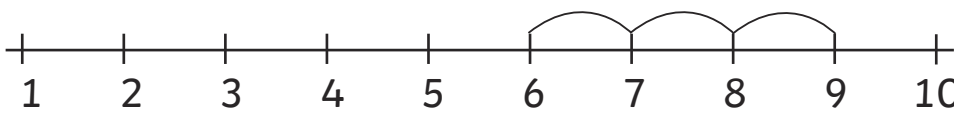
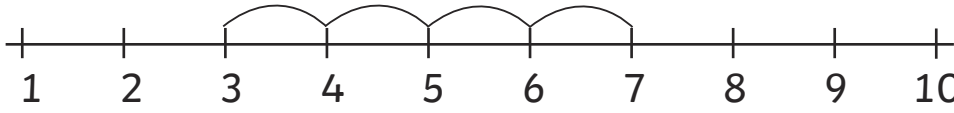
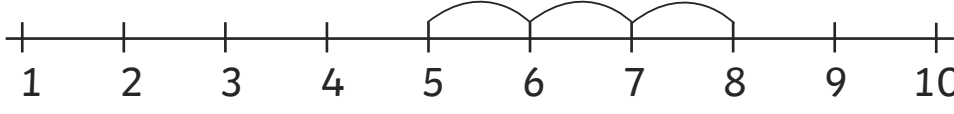
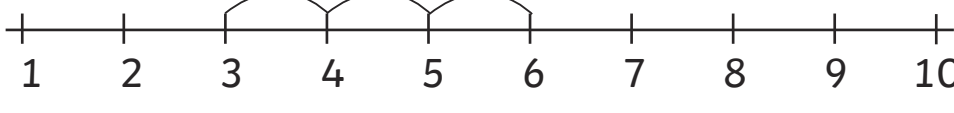
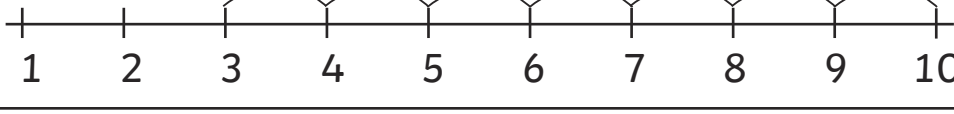
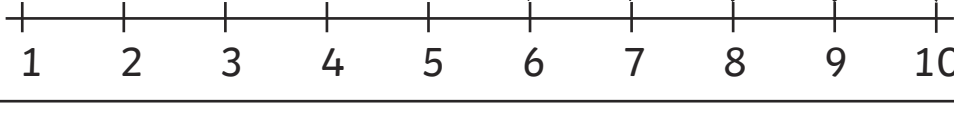
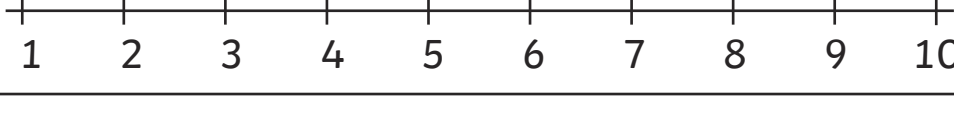



Missing Number Addition With Number Line up to 10

Example	
$4 + ? = 6$ $? = 2$	
$3 + \underline{\quad} = 5$	
$6 + \underline{\quad} = 9$	
$3 + \underline{\quad} = 7$	
$5 + \underline{\quad} = 8$	
$3 + \underline{\quad} = 6$	
$3 + \underline{\quad} = 10$	
$6 + \underline{\quad} = 10$	
$4 + \underline{\quad} = 7$	
$3 + \underline{\quad} = 8$	
$2 + \underline{\quad} = 9$	

Missing Number Addition With Number Line up to 10 **Answers**

Example	
$4 + ? = 6$ $? = 2$	
$3 + 2 = 5$	
$6 + 3 = 9$	
$3 + 4 = 7$	
$5 + 3 = 8$	
$3 + 3 = 6$	
$3 + 7 = 10$	
$6 + 4 = 10$	
$4 + 3 = 7$	
$3 + 5 = 8$	
$2 + 7 = 9$	